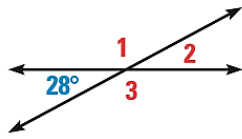
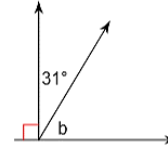


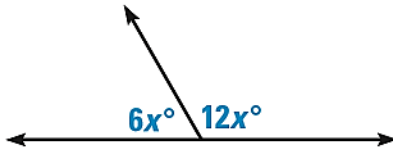
1. Find the missing angles.



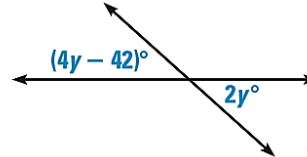
2. Solve for b.



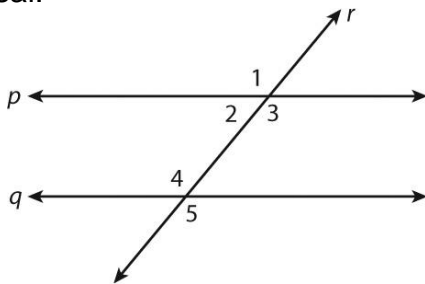
3. Solve for x.



4. solve for y.



5. a and b are parallel lines, and c is a transversal.



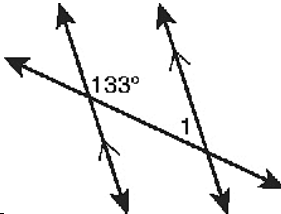
A. Name a pair of alternate interior angles.

B. Name a pair of same side interior angles.

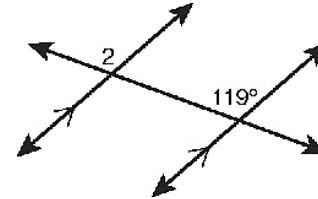
C. Name a pair of corresponding angles.

D. Name a pair of alternate exterior angles.

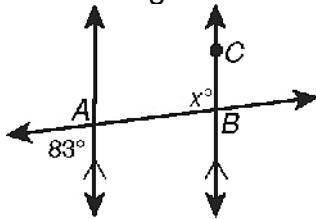
6. Find angle 1.



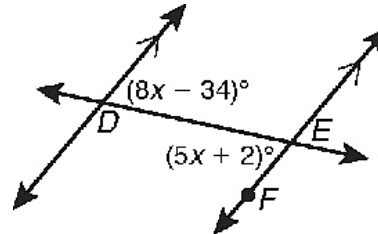
7. Find angle 2.



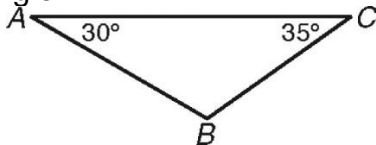
8. Find angle x.



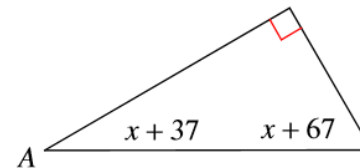
9. Solve for x.



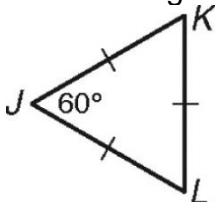
10. Find angle B.



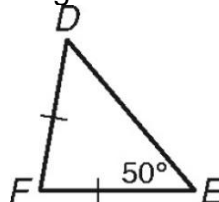
11. Solve for x.



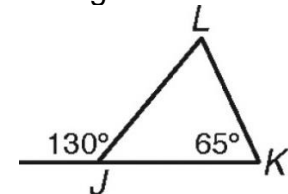
14. Find angle K.



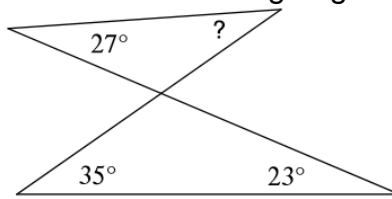
15. Find angle F and D.



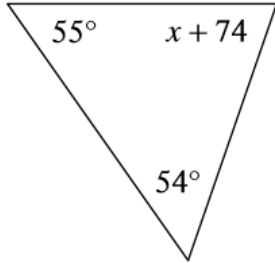
16. Find angle L and K.



17. Find the missing angle.



18. Solve for x .



19. Find the missing angle.

