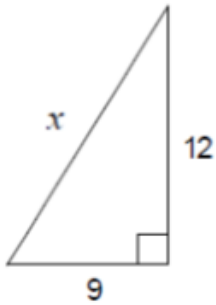


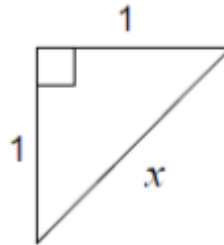
Name: \_\_\_\_\_ Date: \_\_\_\_\_

Calculate the measure of  $x$  in each.

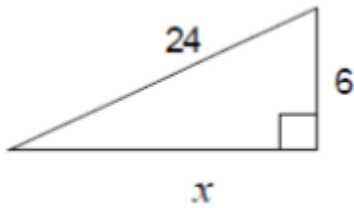
1.



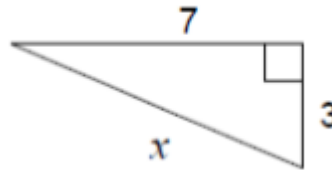
2.



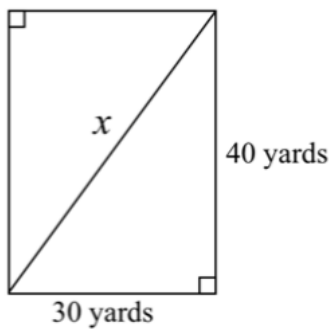
3.



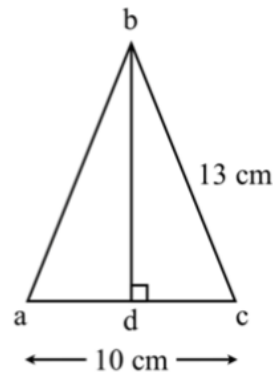
4.



5.



6. What is the length of  $BD$ ?



7. Use the Pythagorean Theorem to find out if these are right triangles.

